



Jai Mahakali Shikshan Sanstha's
AGNIHOTRI COLLEGE OF ENGINEERING (NAGTHANA)

Nagthana Road, Near Bypass Highway, Sindi (Meghe), Wardha (Maharashtra) 442001

Web: www.acenagthana.ac.in



(Affiliated to R.T. M. Nagpur University, Nagpur, Approved by AICTE New Delhi, DTE Mumbai, Recognised by State Govt. of Maharashtra)



COLLEGE CODE
— 4197 —

Boys Hostel

Girls Hostel

Auditorium

Free Bus Facility

SALIENT FEATURES

- Experienced Teaching Faculty as per UGC norms.
- Well Equipped LABS.
- Advanced Academic Softwares - like MATLAB, ALTERA etc.
- Digital Library with more than 200 online Journals and IEEE papers.
- Zonal Center for IIT Delhi, IIT Kharagpur, IIT Roorkee.
- Visiting Faculty from Industry and Institute.
- Infrastructure as per AICTE norms.
- Healthy Campus Placement.
- University Representation in SPORTS & NSS.
- Curricular, Co-curricular & Extra Curricular activities for students.
- Separate Hostels for Boys & Girls.
- Bank Loan and Scholarship Assistance.

ADMISSIONS OPEN

University Toppers



AYESHA SYED
82.52% — 2nd Rank



RENUKA WASU
81.50% — 3rd Rank

**SESSION
2016-17**



SNEHA TADAS
9.2 CGPA — 3rd Rank



AMAN VYAPARI
9.02 CGPA — 7th Rank

**SESSION
2017-18**



CHAITAL HANDE
80.25% — 1st Rank



SWATI WATKAR
79.50% — 2nd Rank

**SESSION
2018-19**

||| Courses Run |||

B.E.

- Mechanical Engineering
- Electrical Engineering
- Electronics & Communication Engineering

- Computer Science Engineering
- Civil Engineering

M. Tech.

- Electronics Engineering
- Computer Science & Engineering

Zonal Center for IIT'S



IIT Kharagpur for Quadcopter Design



IIT Delhi for India's Biggest Networking Championship



IIT Delhi for Robotryst



IIT Delhi for Auto Motive Design & Analysis.

Our Placed Students in Topmost MNC's



Companies



FEES STRUCTURE

B.E. 1st Year*

Sr. No.	Category	Tuition Fee	Hostel Fee	Mess*
1	SC/ST/VJ/NT/SBC	Free	5000	Free
2	OBC	1500	5000	Free
3	OPEN (EBC)	5000	5000	Free
4	OMS (Other than Maharashtra Students)	55000		Free

B.E. Direct 2nd Year*

Sr.No.	Branch	SC/ST/VJ/NT/SBC	OBC	OPEN (EBC)	Hostel Fee
		Tuition Fee	Tuition Fee	Tuition Fee	
1	CSE, CIVIL, E&C & MECH.	1000	1500	10,000	5000
2	ELECTRICAL	1000	5000	10,000	5000

टीप : शासनातर्फे महाविद्यालयाचे निर्गमित केलेले शिक्षण शुल्क रु. ७०,००० आहेत.*
*Conditions Apply

For Admissions CALL NOW 9372424163, 7498567871



Jai Mahakali Shikshan Sanstha

AGNIHOTRI COLLEGE OF ENGINEERING

Address: Near Bypass Highway, Nagthana Road, Sindi (Meghe), Wardha, Maharashtra 442001



DETAILED SOLUTION OF MOCK-CET TEST PAPER - 01

(As Per MHT-CET Exam)

(Dated on 23/05/2020)

MHT-CET

SUBJECT : Physics Paper Set 2 (Solutions)

Q. 1] A wheel of moment of inertia 2 Kg m^2 is rotating about an axis passing through centre and perpendicular to its plane at a speed 60 rad/s . Due to friction, it comes to rest in 5 minutes. The angular momentum of the wheel three minutes before it stops rotating is

- (A) $24 \text{ Kg m}^2/\text{s}$
- (B) $48 \text{ Kg m}^2/\text{s}$
- (C) $72 \text{ Kg m}^2/\text{s}$
- (D) $96 \text{ Kg m}^2/\text{s}$

Solⁿ:(C)

$$I = 2 \text{ kg m}^2, \omega_0 = 60 \text{ rad/s}$$

$$t = 5 \text{ min} = 5 \times 60 = 300 \text{ s}$$

$$\alpha = \frac{0 - 60}{300} = \frac{-60}{300} = \frac{-1}{5} \text{ rad/s}^2$$

for 2 min (from starting) ($2 \text{ min} = 120 \text{ sec}$)

$$\omega = \omega_0 + \alpha t$$

$$= 60 - \frac{1}{5} \times 120 = 60 - 24$$

$$\omega = 36 \text{ rad/s} \text{ \& } L = I\omega = 2 \times 36 = 72 \text{ kg m}^2/\text{s}$$

Q. 2] The equation of the progressive wave is $Y = 3 \sin \left[\pi \left(\frac{t}{3} - \frac{x}{5} \right) + \frac{\pi}{4} \right]$ where x and Y are in metre and time in second. Which of the following is correct?

- (A) velocity $V = 1.5 \text{ m/s}$
- (B) amplitude $A = 3 \text{ cm}$
- (C) frequency $F = 0.2 \text{ Hz}$
- (D) wavelength $\lambda = 10 \text{ m}$

Solⁿ:(D)

$$y = 3 \sin \left[2\pi \left(\frac{t}{6} - \frac{x}{10} \right) + \frac{\pi}{4} \right]$$

$$\text{Compare } y = A \sin \left[2\pi \left(\frac{t}{T} - \frac{x}{\lambda} \right) + \frac{\pi}{4} \right]$$

x and y are metre

$$\therefore \lambda = 10 \text{ m}$$

Q. 3]Two spherical black bodies have radii ' r_1 ' and ' r_2 '. Their surface temperatures are ' T_1 ' and ' T_2 '. If they radiate same power then $\frac{r_2}{r_1}$ is

(A) $\frac{T_1}{T_2}$

(B) $\frac{T_2}{T_1}$

(C) $\left(\frac{T_1}{T_2}\right)^2$

(D) $\left(\frac{T_2}{T_1}\right)^2$

Solⁿ:(C)

$$\frac{Q}{t} = \sigma AT^4$$

i.e. power = σAT^4

\therefore for same power

$$\therefore A \propto \frac{1}{T^4}$$

$$\therefore \frac{A_2}{A_1} = \frac{T_1^4}{T_2^4}$$

$$\therefore \frac{4\pi r_2^2}{4\pi r_1^2} = \frac{T_1^4}{T_2^4}$$

$$\therefore \frac{r_2}{r_1} = \left(\frac{T_1}{T_2}\right)^2$$

Q. 4]The closed and open organ pipes have same length. When they are vibrating simultaneously in first overtone, produce three beats. The length of open pipe is made $\frac{1}{3}$ rd and closed pipe is made three times the original, the number of beats produced will be

(A) 8

(B) 14

(C) 17

(D) 20

Solⁿ: (C)

For open pipe first overtone $v_1 = \frac{v}{L}$

For closed pipe first overtone $v'_1 = \frac{3v}{4L}$

$$\therefore v_1 - v'_1 = \frac{v}{L} - \frac{3v}{4L} = 3$$

$$\therefore \frac{v}{4L} = 3$$

$$\therefore \frac{v}{L} = 12$$

When length of open pipe is made $\frac{L}{3}$ the fundamental frequency

$$v = \frac{v}{2\left(\frac{L}{3}\right)} = \frac{3v}{2L}$$

When length of closed pipe is made 3 times, the fundamental frequency

$$v' = \frac{v}{4(3L)} = \frac{v}{12L}$$

$$\begin{aligned} \text{Beats produced} &= v - v' \\ &= \frac{3v}{2L} - \frac{v}{12L} \\ &= \frac{17}{12} \cdot \frac{v}{L} = \frac{17}{12} \times 12 \\ &= 17 \end{aligned}$$

Q. 5] A lift mass 'm' is connected to a rope which is moving upward with maximum acceleration 'a'. For maximum safe stress, the elastic limit of the rope is 'T'. The minimum diameter of the rope is (g = gravitational acceleration).

$$(A) \left[\frac{2m(g+a)}{\pi T} \right]^{\frac{1}{2}}$$

$$(B) \left[\frac{4m(g+a)}{\pi T} \right]^{\frac{1}{2}}$$

$$(C) \left[\frac{m(g+a)}{\pi T} \right]^{\frac{1}{2}}$$

$$(D) \left[\frac{m(g+a)}{2\pi T} \right]^{\frac{1}{2}}$$

Solⁿ:(B)

The maximum tension in the rope = $m(g + a)$

$$\text{Stress in the rope} = \frac{m(g + a)}{\pi r^2}$$

$$\therefore T = \frac{m(g + a)}{\pi r^2} = \frac{m(g + a)}{\pi \left(\frac{d}{2}\right)^2}$$

$$\therefore T = \frac{4m(g + a)}{\pi d^2}$$

$$\therefore d^2 = \frac{4m(g + a)}{\pi T}$$

$$\therefore d = \left[\frac{4m(g + a)}{\pi T} \right]^{\frac{1}{2}}$$

Q. 6] A solid sphere of mass 2 kg is rolling on a frictionless horizontal surface with velocity 6 m/s. It collides on the free end of an ideal spring whose other end is fixed. The maximum compression produced in the spring will be (Force constant of the spring = 36 N/m).

(A) $\sqrt{14} \text{ m}$

(B) $\sqrt{2.8} \text{ m}$

(C) $\sqrt{1.4} \text{ m}$

(D) $\sqrt{0.7} \text{ m}$

Solⁿ: (B)

Kinetic energy of rolling solid sphere

$$= \frac{1}{2} mV^2 + \frac{1}{2} I\omega^2$$

$$= \frac{1}{2} mV^2 + \frac{1}{2} \times \frac{2}{5} m r^2 \omega^2$$

$$= \frac{1}{2} mV^2 + \frac{1}{5} mV^2$$

$$= \frac{7}{10} mV^2$$

The potential energy of the spring on maximum compression x

$$= \frac{1}{2} kx^2$$

$$\therefore \frac{1}{2} kx^2 = \frac{7}{10} mV^2$$

$$x^2 = \frac{14}{10} \frac{mV^2}{k}$$

$$= \frac{14}{10} \times \frac{2 \times (6)^2}{36}$$

$$= 2.8$$

$$\therefore x = \sqrt{2.8} \text{ m}$$

- Q. 7]** A flywheel at rest is to reach an angular velocity of 24 rad/s in 8 second with constant angular acceleration. The total angle turned through during this interval is
- (A) 24 rad
 - (B) 48 rad
 - (C) 72 rad
 - (D) 96 rad

Solⁿ:(D)

$$\omega_0 = 0, \omega = 24 \text{ rad/s}, t = 8 \text{ s}$$

$$\therefore \alpha = \frac{\omega - \omega_0}{t} = \frac{24}{8} = 3 \text{ rad/s}^2$$

$$\begin{aligned}\theta &= \omega_0 t + \frac{1}{2} \alpha t^2 \\ &= 0 + \frac{1}{2} \times 3 \times (8)^2 \\ &= \frac{3 \times 64}{2} = 96 \text{ rad.}\end{aligned}$$

- Q. 8]** Two uniform wires of the same material are vibrating under the same tension. If the first overtone of the first wire is equal to the second overtone of the second wire and radius of the first wire is twice the radius of the second wire then the ratio of the lengths of the first wire to second wire is

- (A) $\frac{1}{3}$
- (B) $\frac{1}{4}$
- (C) $\frac{1}{5}$
- (D) $\frac{1}{6}$

Solⁿ:(A)

Fundamental frequency of the first wire

$$f = \frac{1}{2L_1} \sqrt{\frac{T}{m}} = \frac{1}{2L_1} \sqrt{\frac{T}{\pi r_1^2 \rho}} = \frac{1}{2L_1 r_1} \sqrt{\frac{T}{\pi \rho}}$$

$$\text{The first overtone } f_1 = 2f = \frac{2}{2L_1 r_1} \sqrt{\frac{T}{\pi \rho}} = \frac{1}{L_1 r_1} \sqrt{\frac{T}{\pi \rho}}$$

The second overtone of the second wire

$$f_2 = \frac{3}{2L_2 r_2} \sqrt{\frac{T}{\pi \rho}}$$

$$f_1 = f_2$$

$$\frac{1}{L_1 r_1} \sqrt{\frac{T}{\pi \rho}} = \frac{3}{2L_2 r_2} \sqrt{\frac{T}{\pi \rho}}$$

$$\therefore 3L_1 r_1 = 2L_2 r_2$$

$$\frac{L_1}{L_2} = \frac{2}{3} \cdot \frac{r_2}{r_1}$$

$$= \frac{2}{3} \cdot \frac{r_2}{2r_2} \quad [\because r_1 = 2r_2]$$

$$= \frac{1}{3}$$

Q. 9] When one end of the capillary is dipped in water, the height of water column is 'h'. The upward force of 105 dyne due to surface tension is balanced by the force due to the weight of water column. The inner circumference of the capillary is

(Surface tension of water = 7×10^{-2} N/m)

(A) 1.5 cm

(B) 2 cm

(C) 2.5 cm

(D) 3 cm

Solⁿ: (A)

$$F = 105 \text{ dyne} = 105 \times 10^{-5} \text{ N}, T = 7 \times 10^{-2} \text{ N/m}$$

$$2\pi r T = F$$

$$2\pi r = \frac{F}{T} = \frac{105 \times 10^{-5}}{7 \times 10^{-2}}$$

$$= 15 \times 10^{-3} \text{ m}$$

$$= 1.5 \times 10^{-2} \text{ m}$$

$$= 1.5 \text{ cm}$$

Q. 10] For a rigid diatomic molecule, universal gas constant $R = nC_p$ where ' C_p ' is the molar specific heat at constant pressure and ' n ' is a number. Hence n is equal to

(A) 0.2257

(B) 0.4

(C) 0.2857

(D) 0.3557

Solⁿ:(C)

For rigid diatomic molecule

$$\frac{C_p}{C_v} = \frac{7}{5}$$

$$\therefore C_v = \frac{5}{7}C_p$$

$$\text{Also } C_p - C_v = R$$

$$C_p - \frac{5}{7}C_p = R$$

$$\frac{2}{7}C_p = R$$

$$\therefore n = \frac{2}{7} = 0.2857$$

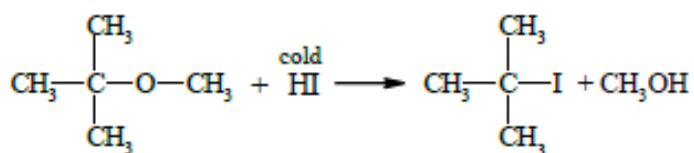
MHT-CET

Subject : Chemistry Paper Set 2 (Solution)

Q.1 tert-butyl methyl ether on treatment with hydrogen iodide in cold gives

- (A) tert-butyl iodide and methyl iodide
- (B) tert-butyl alcohol and methyl alcohol
- (C) tert-butyl alcohol and methyl iodide
- (D) tert-butyl iodide and methyl alcohol

Sol. (D)



Q.2 Name the process that is employed to refine aluminium.

- (A) Hall's process
- (B) Mond process
- (C) Hoope's process
- (D) Serperck's process

Sol. (C)

Factual

Q.3 The colour and magnetic nature of manganate ion $(\text{MnO}_4)^{2-}$ is

- (A) green, paramagnetic
- (B) purple, diamagnetic
- (C) green, diamagnetic
- (D) purple, paramagnetic

Sol. (A)

$(\text{MnO}_4)^{2-}$ – manganate ion is green and paramagnetic.

Q.4 The osmotic pressure of solution containing 34.2 g of cane sugar (molar mass = 342 g mol⁻¹) in 1L of solution at 20° C is

(Given, R = 0.082 L atm K⁻¹ mol⁻¹)

- (A) 2.40 atm
- (B) 3.6 atm
- (C) 24 atm
- (D) 0.0024 atm

Sol. (A)

$$\pi = CRT$$

$$\pi = \frac{34.2}{342 \times 1\text{L}} \times 0.082 \times 293 = 2.40 \text{ atm}$$

Q.5 In assigning R-S configuration which among the following groups has highest priority?

- (A) $-\text{SO}_3\text{H}$ (B) $-\text{COOH}$ (C) $-\text{CHO}$ (D) $-\text{C}_6\text{H}_5$

Sol. (A)

$-\text{SO}_3\text{H}$ (sulphur atomic number 16)

Q.6 Which of the following is used as antiseptic?

- (A) Chloramphenicol (B) Bithional
(C) Cimetidine (D) Chlordiazepoxide

Sol. (B)

Factual

Q.7 In preparation of sulphuric acid from sulphur dioxide in lead chamber process. What substance is used as a catalyst?

- (A) Manganese dioxide (B) Vanadium pentoxide
(C) Nitric oxide (D) Raney Nickel

Sol. (C)

Catalyst used in lead chamber process is nitric oxide.

Q.8 The correct charge on and co-ordination number of 'Fe' in $\text{K}_3[\text{Fe}(\text{CN})_6]$ is

- (A) +2, 4 (B) +3, 6 (C) +2, 6 (D) +3, 3

Sol. (B)

$$\begin{aligned}\text{K}_3[\text{Fe}(\text{CN})_6] &\Rightarrow [\text{Fe}(\text{CN})_6]^{3-} \\ x + 6(-1) &= -3 \\ \therefore x &= +3\end{aligned}$$

Coordination number of Fe is 6 as 6 CN^- are attached.

Q.9. Which among the following reactions is an example of pseudo first order reaction?

- (A) Inversion of cane sugar
(B) Decomposition of H_2O_2
(C) Conversion of cyclopropane to propene
(D) Decomposition of N_2O_5

Sol. (A)

Factual

Q.10 The amine which reacts with p-toluenesulphonyl chloride to give a clear solution which on acidification gives insoluble compound is

- (A) $\text{C}_2\text{H}_5\text{NH}_2$ (B) $(\text{C}_2\text{H}_5)_2\text{NH}$
(C) $(\text{C}_2\text{H}_5)_3\text{N}$ (D) $\text{CH}_3\text{NHC}_2\text{H}_5$

Sol. (A)

1° amine gives clear solution which on acidification gives insoluble compound.

MHT-CET Solution (Set - II)

Subject- Mathematics

1. The objective function $z = 4x_1 + 5x_2$, subject to $2x_1 + x_2 \geq 7$, $2x_1 + 3x_2 \leq 15$, $x_2 \leq 3$, $x_1, x_2 \geq 0$ has minimum value at the point

Ans – A

Corner point

Value of $z = 4x_1 + 5x_2$

Since two points are on x-axis minimum value occurs on x-axis.

Minimum value = 14.

2. If z_1 and z_2 are z co-ordinates of the points of trisection of the segment joining the points A (2, 1, 4), B (-1, 3, 6) then $z_1 + z_2 =$

Ans – D

$A(2, 1, 4)$	$\xrightarrow{1 : 2}$ Z_1	$\xrightarrow{2 : 1}$ Z_2	$B(-1, 3, 6)$
--------------	--------------------------------	--------------------------------	---------------

For $Z_1 \rightarrow 1 : 2$ For $Z_2 \rightarrow 2 : 1$ (Internal division formula)	$ \begin{aligned} Z &= Z_1 + Z_2 \\ &= \frac{(1)(6) + 2(4)}{1 + 2} + \frac{2(6) + (1)(4)}{2 + 1} \\ &= \frac{6 + 8}{3} + \frac{12 + 4}{3} \\ &= \frac{14 + 16}{3} \\ &= \frac{30}{3} \\ &= 10 \end{aligned} $
---	--

3. If $g(x)$ is the inverse function of $f(x)$ and $f'(x) = \frac{1}{1+x^4}$, then $g'(x)$ is

Ans – A

$$\begin{aligned}
 g &= f^{-1} \\
 f(g(x)) &= x \\
 \text{Differentiate w.r.t. } x \\
 f'(g(x)) \cdot g'(x) &= 1
 \end{aligned}$$

$$\begin{aligned}
 \therefore \frac{1}{1+(g(x))^4} \cdot g'(x) &= 1 \\
 g'(x) &= 1 + [g(x)]^4
 \end{aligned}$$

4. If $\int \frac{1}{\sqrt{9-16x^2}} dx = \alpha \sin^{-1}(\beta x) + c$, then $\alpha + \frac{1}{\beta} =$

Ans – A

$$\int \frac{1}{\sqrt{9-16x^2}} dx = \alpha \sin^{-1}(\beta x) + c$$

$$\int \frac{1}{\sqrt{3^2-(4x)^2}} dx = \frac{1}{4} \sin^{-1}\left(\frac{4x}{3}\right) + c$$

$$\alpha = \frac{1}{4} \quad \beta = \frac{4}{3}$$

$$\alpha + \frac{1}{\beta} = \frac{1}{4} + \frac{3}{4} = 1$$

5. (0, 0), A (1, 2), B (3, 4) are the vertices of ΔOAB . The joint equation of the altitude and median drawn from O is

Ans – D

$$\Rightarrow m = \frac{3}{2}$$

$$\therefore y = \frac{3}{2}x \Rightarrow 3x - 2y = 0$$

$$\text{Slope of AB} = \frac{2}{2} = 1 \Rightarrow \text{Slope of OP} = -1$$

$$\text{Equation of OP} \Rightarrow y = -x \Rightarrow x + y = 0$$

$$\text{Joint equation of OP and OD} \Rightarrow (x + y)(3x - 2y) = 0$$

$$\Rightarrow 3x^2 + xy - 2y^2 = 0$$

6. If the function $f(x) = \begin{cases} \left[\tan\left(\frac{\pi}{4} + x\right) \right]^{\frac{1}{x}} & \text{for } x \neq 0 \\ K & \text{for } x = 0 \end{cases}$ is continuous at $x = 0$, then $K = ?$

Ans – C

$$f(0) = \lim_{x \rightarrow 0} f(x)$$

$$= \lim_{x \rightarrow 0} \left[\tan\left(\frac{\pi}{4} + x\right) \right]^{\frac{1}{x}}$$

$$= \lim_{x \rightarrow 0} \left(\frac{1 + \tan x}{1 - \tan x} \right)^{\frac{1}{x}}$$

$$= \lim_{x \rightarrow 0} \frac{\left[(1 + \tan x)^{\frac{1}{\tan x}} \right]^{\tan x}}{\left[(1 - \tan x)^{-\frac{1}{\tan x}} \right]^{-\tan x}}$$

taking limits

$$= \frac{e^1}{e^{-1}} = e^1 \cdot e^1 = e^2$$

7. In ΔABC if $\sin^2 A + \sin^2 B = \sin^2 C$ and $l(AB) = 10$, then the maximum value of the area of ΔABC is

Ans – C

$$\begin{aligned}\sin^2 A + \sin^2 B &= \sin^2 C \\ \Rightarrow a^2 + b^2 &= c^2 \text{ (Sine Rule)} \\ A(\Delta ABC) &= \frac{1}{2}ab \quad \dots (1)\end{aligned}$$

$$\text{From sine rule } \frac{a}{\sin A} = \frac{b}{\sin B} = \frac{c}{\sin C}$$

$$\Rightarrow \frac{a}{\sin A} = \frac{b}{\sin B} = \frac{10}{1}$$

$$\Rightarrow a = 10 \sin A, b = 10 \sin B$$

$$\begin{aligned}\text{Using equation (1) } A(\Delta ABC) &= \frac{1}{2}(10 \sin A)(10 \sin B) \\ &= 50 \sin A \sin B\end{aligned}$$

$$\text{But maximum value of } \sin A \sin B = \frac{1}{2}$$

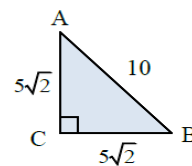
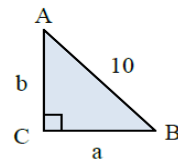
$$\therefore \text{Maximum value of } A(\Delta ABC) = 50 \times \frac{1}{2} = 25$$

OR

$$\angle C = 90^\circ \Rightarrow ABC \text{ is right angled triangle}$$

$$\therefore \text{Area of } \Delta \text{ is maximum when it is } 45^\circ - 45^\circ - 90^\circ \Delta.$$

$$\therefore A(\Delta ABC) = \frac{1}{2} \times 5\sqrt{2} \times 5\sqrt{2} = 25$$



8. If $x = f(t)$ and $y = g(t)$ are differentiable functions of t then $\frac{d^2y}{dx^2}$ is

Ans – A

$$\begin{aligned}x &= f(t) \\ y &= g(t) \\ \frac{dx}{dt} &= f'(t) \\ \frac{dy}{dt} &= g'(t) \\ \frac{dy}{dx} &= \frac{\frac{dy}{dt}}{\frac{dx}{dt}} = \frac{g'(t)}{f'(t)} \\ \frac{d^2y}{dx^2} &= \frac{d}{dx} \left(\frac{g'(t)}{f'(t)} \right) \\ &= \frac{f'(t) \cdot g''(t) - g'(t) \cdot f''(t)}{(f'(t))^2} \cdot \frac{dt}{dx} \\ &= \frac{f'(t) \cdot g''(t) - g'(t) \cdot f''(t)}{(f'(t))^2} \cdot \frac{1}{f'(t)} \\ &= \frac{f'(t) \cdot g''(t) - g'(t) f''(t)}{(f'(t))^3}\end{aligned}$$

9. Which of the following statement pattern is a tautology?

Ans-C

It can be done using truth table or using rules of logic.

$$(A) p \vee (q \rightarrow p) \equiv p \vee (\sim q \vee p) \equiv p \vee p \vee \sim q \\ \equiv p \vee \sim q$$

$$(B) \sim q \rightarrow \sim p \equiv q \vee \sim p$$

$$(D) p \wedge \sim p \equiv F$$

So left is (C)

(C)

p	q	$q \rightarrow p$	$\sim p$	$\sim p \leftrightarrow q$	$(q \rightarrow p) \vee (\sim p \leftrightarrow q)$
T	T	T	F	F	T
T	F	T	F	T	T
F	T	F	T	T	T
F	F	T	T	F	T

10. If the angle between the planes $\vec{r} \cdot (m\hat{i} - \hat{j} + 2\hat{k}) + 3 = 0$ and $\vec{r} \cdot (2\hat{i} - m\hat{j} - \hat{k}) - 5 = 0$ is $\frac{\pi}{3}$

Ans – C

Direction ratios \vec{n}_1 are $m, -1, 2$

Direction ratios \vec{n}_2 are $2, -m, -1$

$$\theta = \frac{\pi}{3}$$

$$\cos \theta = \left| \frac{\vec{n}_1 \cdot \vec{n}_2}{|\vec{n}_1| |\vec{n}_2|} \right| \Rightarrow \frac{1}{2} = \left| \frac{2m + m - 2}{\sqrt{m^2 + 5} \sqrt{m^2 + 5}} \right|$$

$$\frac{1}{2} = \left| \frac{3m - 2}{m^2 + 5} \right| \Rightarrow m^2 + 5 = \pm(6m - 4)$$

$$\Rightarrow m^2 + 5 = 6m - 4, m^2 + 5 = -6m + 4$$

$$m^2 - 6m + 9 = 0, m^2 + 6m + 1 = 0$$

$$(m - 3)^2 = 0$$

$$m = 3$$

Subject : Biology

Q.1 During fertilization if the pollen tube enters the ovule through integuments, then it is called as ----

- (A) Misogamy (B) Porogamy (C) Chalazogamy (D) Siphonogamy

Sol. (A)

Q.2 To determine whether F₁ hybrid is homozygous or heterozygous for a particular trait ----- crossed is performed.

- (A) Monohybrid (B) Test (C) Back (D) Reciprocal

Sol. (B)

Q.3 Number of oxygen molecules utilized in glycolysis is _____

- (A) 0 (B) 2 (C) 4 (D) 6

Sol. (A)

Q.4 A cell organelle which lacks membrane, consists of 65% rRNA, 35% proteins and helps in protein synthesis is _____

- (A) Nucleus (B) Nucleoid (C) Ribosome (D) Nucleolus

Sol. (C)

Q.5 Cyclic photophosphorylation will NOT take place in the absence of _____

- (A) Carotenoids (B) Chlorophyll ~~a~~ (C) Xanthophylls (D) Phycoerythrin

Sol. (B)

Q.6 How many different types of gametes will be formed by a pea plant with genotype TtYy?

- (A) 16 (B) 08 (C) 06 (D) 04

Sol. (D)

Q.7 The megasporangium proper of an angiosperm ovule is represented by

- (A) Integument (B) Funicle (C) Nucellus (D) Micropyle

Sol. (C)

Q.8 Which one of the following is an essential factor for photophosphorylation?

- (A) Sunlight (B) Carbohydrate (C) Oxygen (D) Water

Sol. (A)

Q.9 Generally the pollen grains of monocots are _____ and dicots are _____ respectively.

- (A) Uniporate and Biporate (B) Biporate and Triporate
(C) Uniporate and Triporate (D) Triporate and Tetraporate

Sol. (C)

Q.10 A nucleic acid whose molecular weight ranges between 40,000 to 1,00,000 in a cell is -

- (A) DNA (B) mRNA (C) tRNA (D) rRNA

Sol. (D)